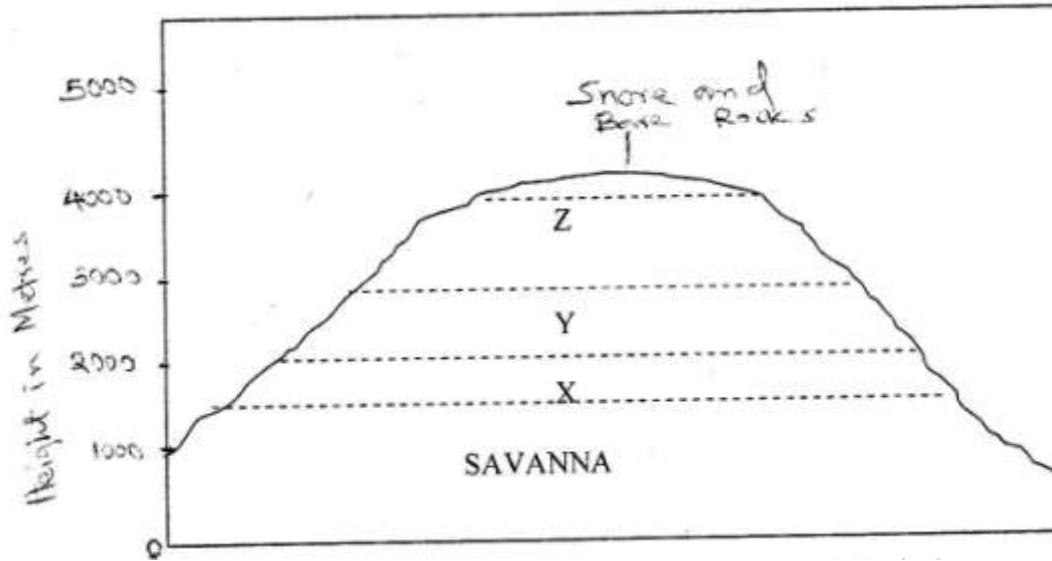


VEGETATION

1. 1999 Q 9a, b

The diagram below represents zones of natural vegetation on a mountain use it to answer questions (a)



- (a) (i) In your answer booklet, name the zones marked X, Y and Z

.....
.....
.....

- (ii) Describe the characteristics of tropical Savannah vegetation

.....
.....
.....
.....
.....
.....

- (iii) State two reasons why the mountaintop has no vegetation

.....
.....

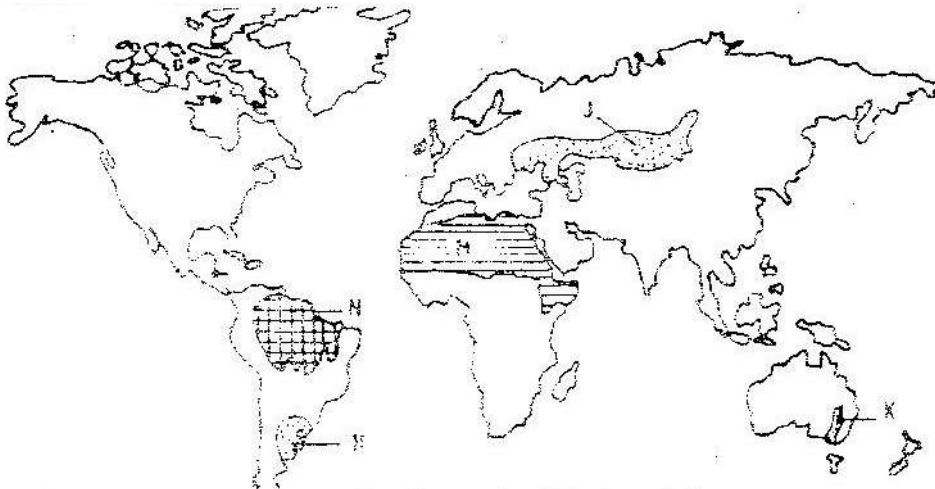
(b) Explain three factors that have led to a decline of the natural grassland in Kenya.

.....
.....
.....

2. 2002 Q 8a-c

The map below shows some vegetation regions of the world.

Use it to answer questions (a) to (c).



a) Name the temperate grasslands marked H, J and K.

.....
.....
.....

b) Describe the characteristics of the natural vegetation found in the shaded area marked N.

.....
.....
.....
.....

c) i) Explain four ways in which the vegetation found in the area marked M adapts to the environment conditions of the region.

.....
.....

3. 2005 Q 5

(a) What is a natural vegetation?

(2 marks)

.....
.....

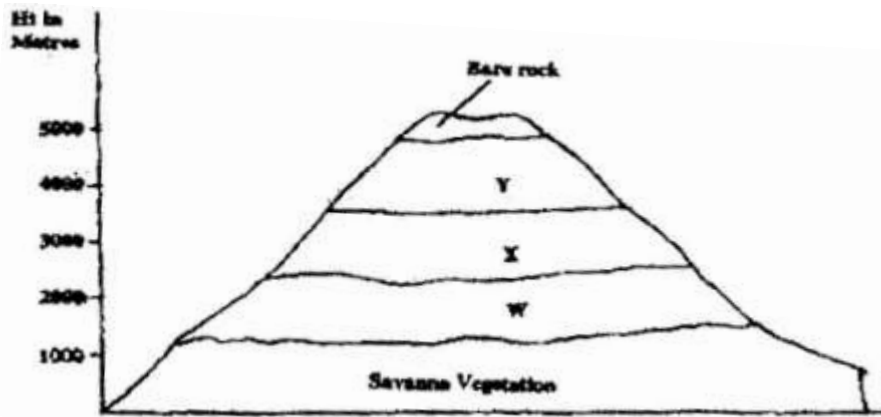
(b) State three characteristics of Mediterranean vegetation

(3 marks)

.....
.....
.....

4. 2006 Q 9a

The diagram below represents zones of natural vegetation on a mountain in Africa. Use it to answer question (a) (i) and (ii)



a) (i) Name the vegetation zones marked W, X and Y.

(3 marks)

.....
.....
.....

(ii) Describe the characteristics of the savanna vegetation.

(6 marks)

.....
.....
.....
.....
.....
.....
.....
.....
.....

(iii) Name the temperate grasslands found in the following countries:

- Canada (1 mark)

.....

- Russia (1 mark)

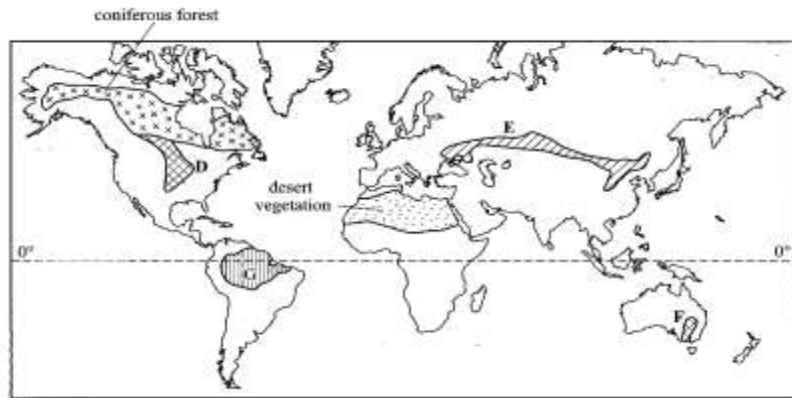
.....

- Australia (1 mark)

.....

5. 2010 Q 7a,b

The map below shows some vegetation regions of the world. Use it to answer questions (a) and (b) coniferous forest



(a) (i) Name the temperate grasslands marked D, E and F. (3 marks)

.....
.....
.....

(ii) Describe the characteristics of the natural vegetation found in the shaded area marked G. (6 marks)

.....
.....
.....
.....
.....
.....

(b) Explain how climate has influenced the existence of the following types of vegetation shown on the map.

(i) Desert vegetation; (4 marks)

.....
.....
.....
.....

(ii) Coniferous forest. (4 marks)

.....
.....
.....
.....